







Week of 4/17

_____ 's **Weekly HOMEWORK**

Assignments

MONDAY 	Read for 15 minutes. This includes reading your April Fluency packet for Day 17, five times. You should have read Day 15 & 16 over the weekend. <i>Write each of your new spelling words twice.</i> Have you started your insect project?
TUESDAY 	Read for 15 minutes. This includes reading your April Fluency packet for Day 18, five times. Review your Immigration study guide in your folder. <i>Complete the math sheet sent home today.</i>
WEDNESDAY 	Read for 15 minutes. This includes reading your April Fluency packet for Day 19, five times. Please read your passage twice during this time. <i>Complete the Adverb/Noun sent home today.</i>
THURSDAY 	Read for 15 minutes. This includes reading your April Fluency packet for Day 20, five times. Review your Immigration study guide in your folder. <i>Choose ten spelling words to write in complete sentences.</i>



REMINDERS:

Please use your newsletter to study weekly concepts and vocabulary words.
Your spelling words are also on the newsletter. We will not have a reading passage this week. Please read your from your Daily April Fluency Packet sent home. Don't forget: Insect Projects are DUE APRIL 28th! If you need another copy, you can find the assignment and rubric on the CCS website.

INSECT PROJECTS ARE DUE 4/28!!

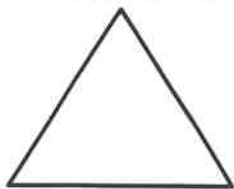
Geometry – Extra Practice Pages

Name: _____

Homework
Due 4/19

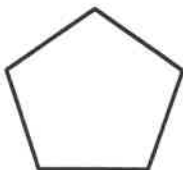
A polygon is a closed shape with straight sides.

pentagon rhombus decagon trapezoid
square hexagon rectangle octagon triangle



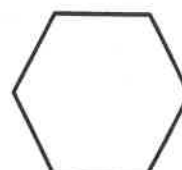
Name: _____

Number of Sides: _____



Name: _____

Number of Sides: _____



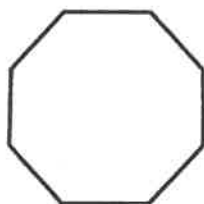
Name: _____

Number of Sides: _____



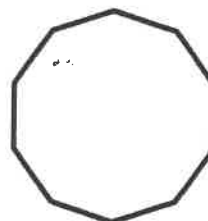
Name: _____

Number of Sides: _____




Name: _____

Number of Sides: _____



Name: _____

Number of Sides: _____




Name: _____

Number of Sides: _____



Name: _____

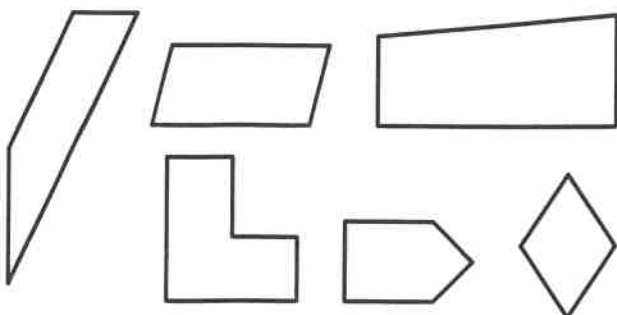
Number of Sides: _____



Name: _____

Number of Sides: _____

Quadrilaterals have 4 sides.
Color all the quadrilaterals.



Quadrilaterals have 4 sides.
Draw 3 different quadrilaterals.

Name: _____

Underline the adverb in each sentence. Circle the noun(s).

- 1.) The captain of the ship quickly steered them to the island.
- 2.) When I run, I always run with my dog.
- 3.) He quietly walks in the hallway.
- 4.) Can you ask her to borrow a pencil?
- 5.) The band softly played a country song.
- 6.) Did you ask him to sing at the game? He will do a wonderful job!
- 7.) The art teacher helped the new student swiftly wash the paintbrushes.
- 8.) The boy eats his dinner carefully.
- 9.) The puppy and the kitten chase each other quickly in the yard.
- 10.) Eleven monkeys swing happily in the trees.
- 11.) Steve joyfully jumped when he heard the awesome news!